

فكرة جداء عددين

$$8 = 2 + 2 + 2 + 2$$

- هذه عملية جمع، تكرر فيها العدد اثنان 4 مرّات.
- يمكن اختصار هذه العملية بعملية أخرى:


$$8 = 4 \times 2$$

عدد المرات التي تكرر فيها العدد

العدد الذي تكرر

- تسمى هذه العملية بعملية ضرب و علامتها (x) و تقرأ (في)

9raya.tn



موقع
التعليمية عدد 1:

$$\cdot \quad x \quad \cdot = 8 + 8$$

$$\cdot \quad x \quad \cdot = 8 + 8 + 8$$

$$\cdot \quad x \quad \cdot = 8 + 8 + 8 + 8$$

$$\cdot \quad x \quad \cdot = 8 + 8 + 8 + 8 + 8$$

$$\cdot \quad x \quad \cdot = 6 + 6$$

$$\cdot \quad x \quad \cdot = 6 + 6 + 6$$

$$\cdot \quad x \quad \cdot = 6 + 6 + 6 + 6$$

$$\cdot \quad x \quad \cdot = 6 + 6 + 6 + 6 + 6$$

التعليمية عدد 2:

$$\cdot \times 2 = 2 + 2 + 2 + 2$$

$$\cdot \times 4 = \cdot + \cdot + \cdot + 4 + 4$$

$$\cdot \times \cdot = + \cdot + \cdot + 6 + 6$$

$$\cdot + \cdot = \cdot \times 2 = 2 \times 12$$

$$\cdot + \cdot = \cdot \times 5 = 5 \times 15$$

التعليمية عدد 3:

أضع الرمز المناسب (=، <، >)

$$6 \times 6 \quad \dots \quad 6 + 6 + 6 + 6$$


$$3 \times 7 \quad \dots \quad 6 \times 7$$

$$1 \times 8 \quad \dots \quad 1 + 8$$

$$3 \times 15 \quad \dots \quad 15 + 15 + 15$$

$$16 \times 4 \quad \dots \quad 16 + 16$$

9raya.tn



موقع

جدول الضرب
2

| | |
|------------|-------------|
| 2 x 1 = 2 | 2 x 7 = 14 |
| 2 x 2 = 4 | 2 x 8 = 16 |
| 2 x 3 = 6 | 2 x 9 = 18 |
| 2 x 4 = 8 | 2 x 10 = 20 |
| 2 x 5 = 10 | 2 x 11 = 22 |
| 2 x 6 = 12 | 2 x 12 = 24 |

2

جدول الضرب
1

| | |
|-----------|-------------|
| 1 x 1 = 1 | 1 x 7 = 7 |
| 1 x 2 = 2 | 1 x 8 = 8 |
| 1 x 3 = 3 | 1 x 9 = 9 |
| 1 x 4 = 4 | 1 x 10 = 10 |
| 1 x 5 = 5 | 1 x 11 = 11 |
| 1 x 6 = 6 | 1 x 12 = 12 |

1

9raya.tn موقع

جدول الضرب
4

| | |
|------------|-------------|
| 4 x 1 = 4 | 4 x 7 = 28 |
| 4 x 2 = 8 | 4 x 8 = 32 |
| 4 x 3 = 12 | 4 x 9 = 36 |
| 4 x 4 = 16 | 4 x 10 = 40 |
| 4 x 5 = 20 | 4 x 11 = 44 |
| 4 x 6 = 24 | 4 x 12 = 48 |

4

جدول الضرب
3

| | |
|------------|-------------|
| 3 x 1 = 3 | 3 x 7 = 21 |
| 3 x 2 = 6 | 3 x 8 = 24 |
| 3 x 3 = 9 | 3 x 9 = 27 |
| 3 x 4 = 12 | 3 x 10 = 30 |
| 3 x 5 = 15 | 3 x 11 = 33 |
| 3 x 6 = 18 | 3 x 12 = 36 |

3

جدول الضرب
6


| | |
|------------|-------------|
| 6 x 1 = 6 | 6 x 7 = 42 |
| 6 x 2 = 12 | 6 x 8 = 48 |
| 6 x 3 = 18 | 6 x 9 = 54 |
| 6 x 4 = 24 | 6 x 10 = 60 |
| 6 x 5 = 30 | 6 x 11 = 66 |
| 6 x 6 = 36 | 6 x 12 = 72 |

6

جدول الضرب
5

| | |
|------------|-------------|
| 5 x 1 = 5 | 5 x 7 = 35 |
| 5 x 2 = 10 | 5 x 8 = 40 |
| 5 x 3 = 15 | 5 x 9 = 45 |
| 5 x 4 = 20 | 5 x 10 = 50 |
| 5 x 5 = 25 | 5 x 11 = 55 |
| 5 x 6 = 30 | 5 x 12 = 60 |

5

9raya.tn  موقع

جدول الضرب
8

| | |
|------------|-------------|
| 8 x 1 = 8 | 8 x 7 = 56 |
| 8 x 2 = 16 | 8 x 8 = 64 |
| 8 x 3 = 24 | 8 x 9 = 72 |
| 8 x 4 = 32 | 8 x 10 = 80 |
| 8 x 5 = 40 | 8 x 11 = 88 |
| 8 x 6 = 48 | 8 x 12 = 96 |

8

جدول الضرب
7

| | |
|------------|-------------|
| 7 x 1 = 7 | 7 x 7 = 49 |
| 7 x 2 = 14 | 7 x 8 = 56 |
| 7 x 3 = 21 | 7 x 9 = 63 |
| 7 x 4 = 28 | 7 x 10 = 70 |
| 7 x 5 = 35 | 7 x 11 = 77 |
| 7 x 6 = 42 | 7 x 12 = 84 |

7

جدول الضرب

10

| | |
|-------------|---------------|
| 10 x 1 = 10 | 10 x 7 = 70 |
| 10 x 2 = 20 | 10 x 8 = 80 |
| 10 x 3 = 30 | 10 x 9 = 90 |
| 10 x 4 = 40 | 10 x 10 = 100 |
| 10 x 5 = 50 | 10 x 11 = 110 |
| 10 x 6 = 60 | 10 x 12 = 120 |


X 10

جدول الضرب

9

| | |
|------------|--------------|
| 9 x 1 = 9 | 9 x 7 = 63 |
| 9 x 2 = 18 | 9 x 8 = 72 |
| 9 x 3 = 27 | 9 x 9 = 81 |
| 9 x 4 = 36 | 9 x 10 = 90 |
| 9 x 5 = 45 | 9 x 11 = 99 |
| 9 x 6 = 54 | 9 x 12 = 108 |

X 9

9raya.tn  موقع